

Cross roads


Letter X

Addition sign


Exercise-5

(According to NEP Guidelines)
(Remembering, Understanding)

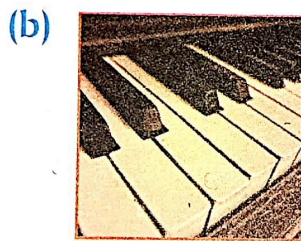
1. Classify the following lines as parallel and intersecting :



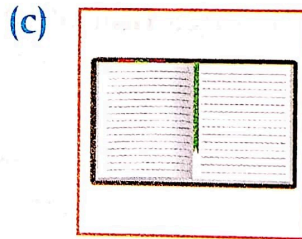
2. Identify intersecting and parallel lines from the following.



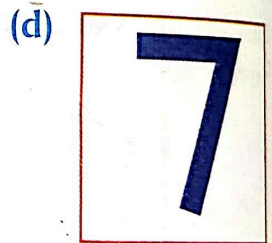
Intersecting



Parallel



Parallel



Intersecting



Exercise-6



(According to NEP Guidelines)
(Remembering, Understanding, Analysing)

1. Fill in the blanks :

- (a) A square is made up of 4 straight lines.
- (b) A triangle is made up of 3 straight lines.
- (c) A circle is made up of 1 curved line(s).
- (d) A rectangle has 4 corners.